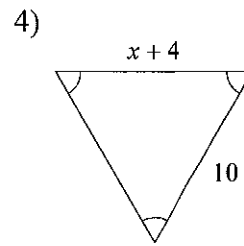
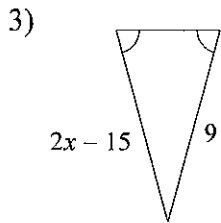
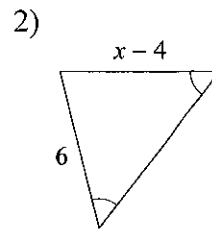
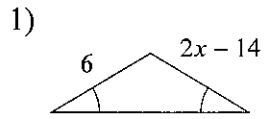
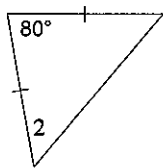


Base Angles & Proportional Parts

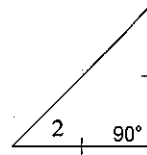
Find the value of x .



5) $m\angle 2 = x + 58$



6) $m\angle 2 = 5x - 5$



Solve for x .

